

MATCHING REVISITED

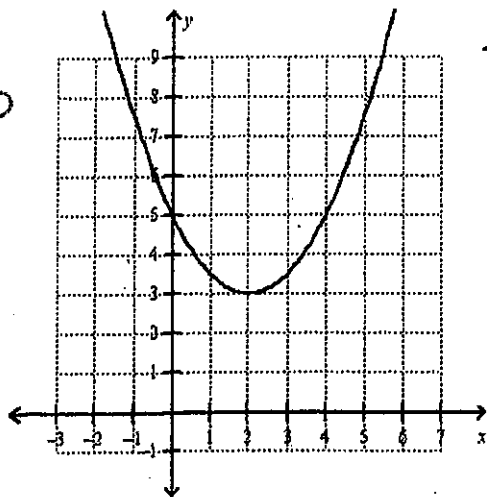
Name _____

Date _____

Block _____

Describe why each of the following sets does or does not go together. Use key features in your explanation.

66



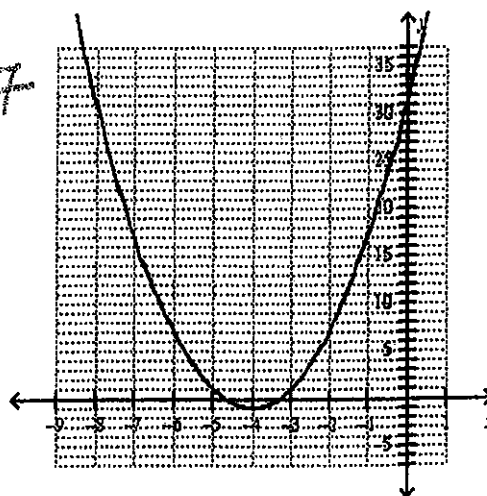
T6

x	y
0	7
1	4
2	3
3	4
4	7

E1

$$y = (x - 2)^2 + 3$$

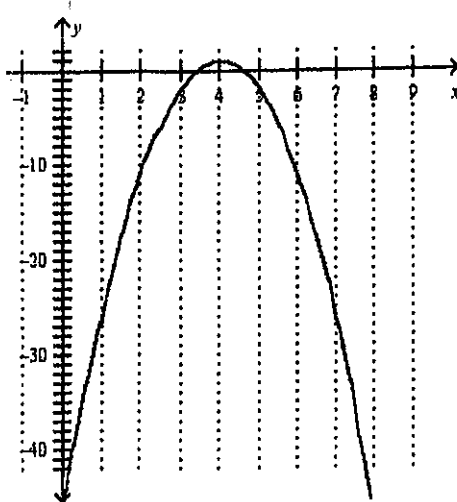
67



T2

x	y
-6	3
-5	0
-4	-1
-3	0
-2	3

$$y = x^2 + 8x + 15$$



65
T7

x	y
-2	9
-1	6
0	7
1	8
2	5

E7

$$y = -3(x - 4)^2 + 1$$